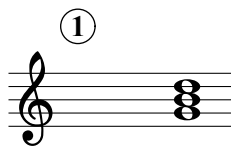






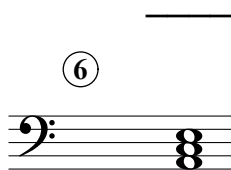


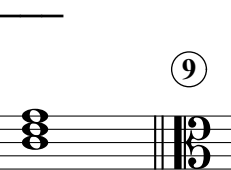

# Triads A

Name: \_\_\_\_\_

## PART 1




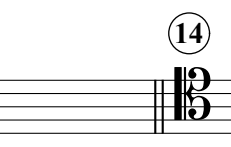

Identify the root note (A, D<sup>#</sup>, etc.) and quality (°, m, +) of each chord.

①  ②  ③  ④  ⑤ 


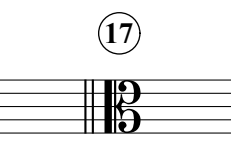



⑥  ⑦  ⑧  ⑨  ⑩ 

## PART 2

Write the specified chords in root position.

⑪  ⑫  ⑬  ⑭  ⑮ 

B<sup>b+</sup>                      D                      G<sup>#°</sup>                      Cm                      B<sup>°</sup>

⑯  ⑰  ⑱  ⑲  ⑳ 

E<sup>b+</sup>                      A<sup>°</sup>                      Fm                      A<sup>b+</sup>                      D<sup>b°</sup>